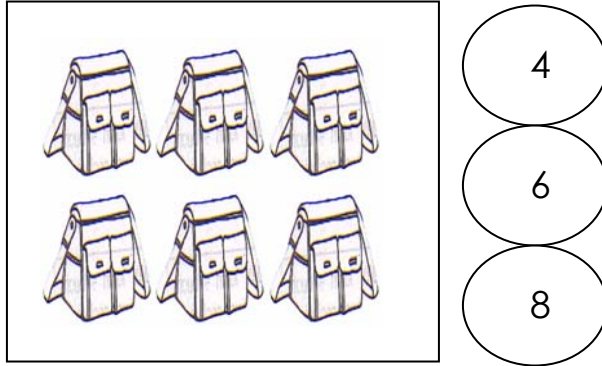
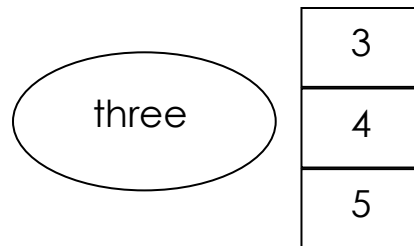


A Choose the correct answer.

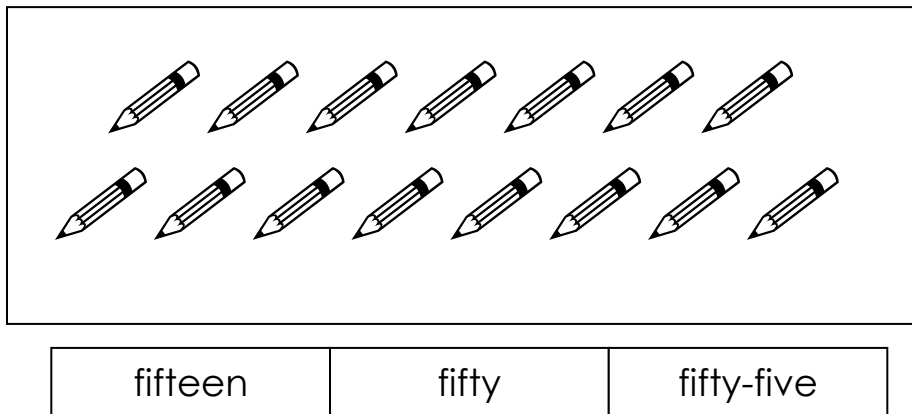
1 Count and colour the correct answer.



2 Read and circle the correct numeral.



3 Underline the correct number words.



4 Colour the correct answer

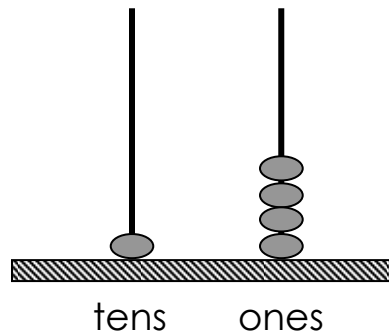
6 comes after

7

9

10

5 Count and circle the correct answer



forty	fourteen	forty-one
-------	----------	-----------

B Fill in the blank with the correct answer.

6 Write the missing number

17	18	20
----	----	----

19, , 21, 22

C Match the correct answer.

7

$$3 + 1$$

5

8

$$9 - 4$$

8

9

$$4 + 4$$

4

D Circle the correct answer.

10 Circle the **total** answer of milks given below.



3

5

7

11 1 less than 3 is (2 , 4 , 6)

E Write the correct answer given.

12 Add 3 and 0 is (3, 4, 5)

13 $9 - 2 =$ (6, 7, 8)

14 $3 + 5 =$ (8, 9, 10)

15 5 take away 3 is (1, 2, 3)

16 $8 - 4 =$ (3, 2, 1)

F Match the correct answer.

17 $6 + 2$ ●

18 $4 - 2$ ●

19 $9 - 5$ ●

20 $0 + 9$ ●

● $5 - 3$


● $10 - 1$

● $2 + 5$

● $5 + 3$

● $8 - 4$

G Choose the correct answer.



21 How many eggs are there?

- A eight
- B nine
- C ten

22 $9 - 4 =$

- A 4
- B 5
- C 8

23 $7 + 3 =$

- A 8
- B 9
- C 10

24 Add 5 and 1 equals.

- A 3
- B 4
- C 6

25 $4 +$ $= 9$

The missing number is

- A 4
- B 5
- C 6

- 26 The difference between 8 and 2 is
A 7
B 6
C 3
- 27 1 tens and 4 ones is
A 14
B 15
C 16
- 28 The word for

40

 is
A forty
B fourteen
C forty-zero
- 29 Alias gives 6 marbles to his brother and has 2 marble left.
How many marbles does he have at first?
A 3
B 4
C 8
- 30 Mary has 10 rambutans. She eats some and has 7
rambutans left. How many rambutans does she eat?
A 2
B 3
C 4

END OF QUESTION PAPER