


(40 marks)

Answer all the questions.

**1** Write in numerals.seven = 

1

2

**2** Count and write the number in words.

2

2

**3**  $8 - 2 =$  

3

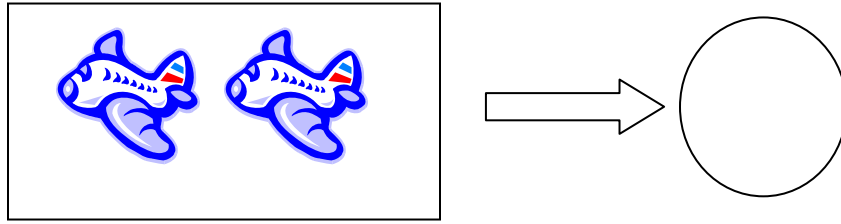
2

**4**  $2 + 7 =$  

4

2


5 Count and write the number.



5

2	

6 Fill in the boxes with the correct sequence of numbers.



6


2	

7  $9 - 0 =$

7

2	

8 Count and add the numbers.



$$\square + \square = \square$$

8

2	

9

2

9 Four and five makes

10 Colour twenty star in the diagram.

10

2



11 What number comes after 3 ?

11

2

12  + 5 = 8


12

2

13 Count and write in numerals.

13

2



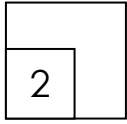
14

2

14 6 -  = 7 - 2

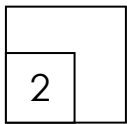
15 Dany had 10 sweets. He ate 6 sweets. How many sweets has he got?

15



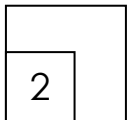
- 
- 16 Adam has 4 candies. His mother bought another 2 candies for him. How many candies does he has now?

16

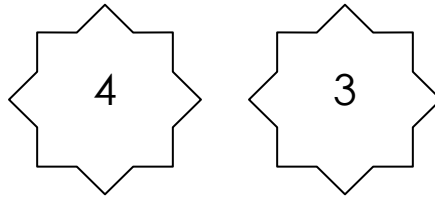


- 16 There are 6 mangoes in the basket. Remy puts 3 more mangoes in the basket. How many mangoes all together?

17

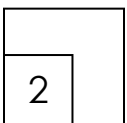


18



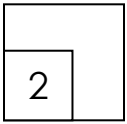
Add the two numbers above.

18

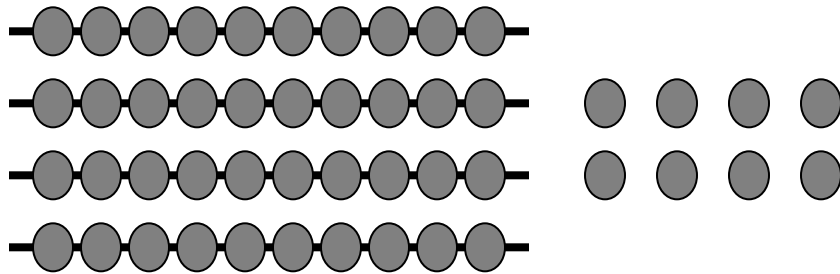


- 19 List all the numbers form 0 to 5.

19

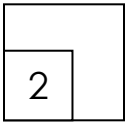


20



How many beads are there?  
Write the number in words.

20



END OF QUESTION PAPER